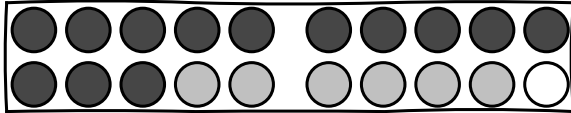

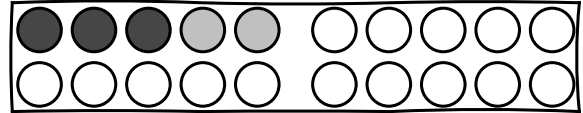


Name: \_\_\_\_\_

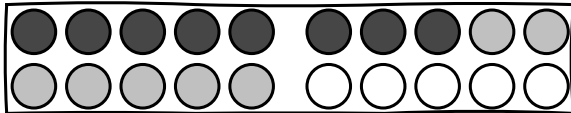
# Rechne im Zahlenraum 20



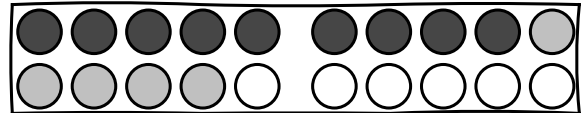
$$\text{---} + \text{---} = \text{---}$$



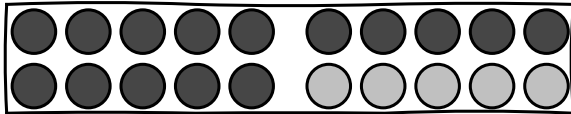
$$\text{---} + \text{---} = \text{---}$$



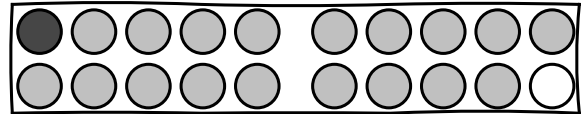
$$\text{---} + \text{---} = \text{---}$$



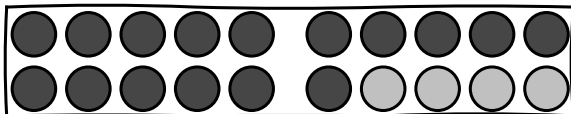
$$\text{---} + \text{---} = \text{---}$$



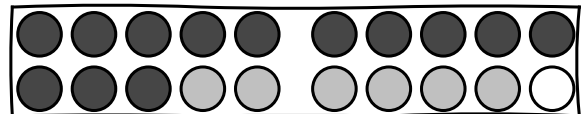
$$\text{---} + \text{---} = \text{---}$$



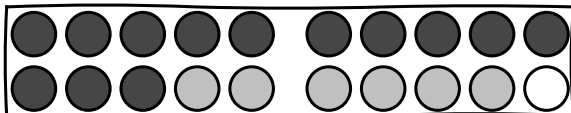
$$\text{---} + \text{---} = \text{---}$$



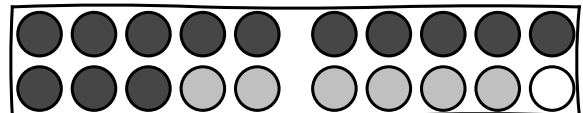
$$\text{---} + \text{---} = \text{---}$$



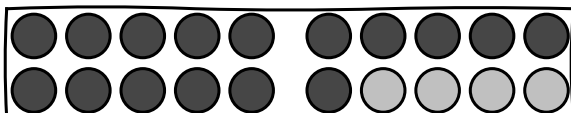
$$\text{---} + \text{---} = \text{---}$$



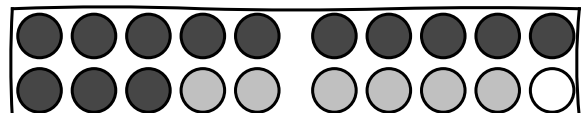
$$\text{---} + \text{---} = \text{---}$$



$$\text{---} + \text{---} = \text{---}$$



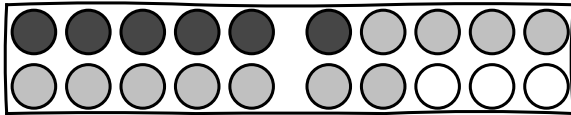

$$\text{---} + \text{---} = \text{---}$$



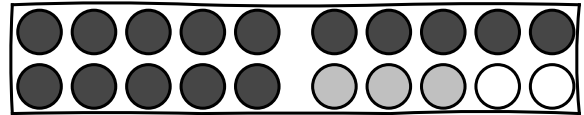
$$\text{---} + \text{---} = \text{---}$$

Name: \_\_\_\_\_

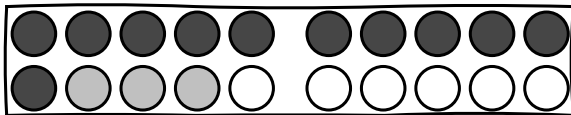
# Rechne im Zahlenraum 20



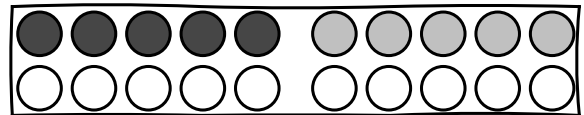
$$\text{---} + \text{---} = \text{---}$$



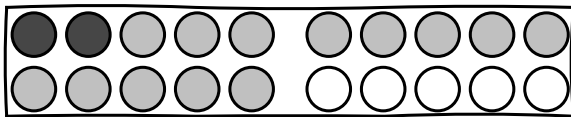
$$\text{---} + \text{---} = \text{---}$$



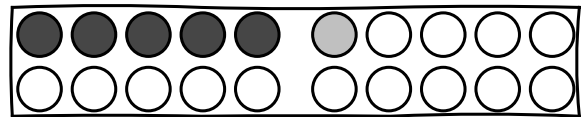
$$\text{---} + \text{---} = \text{---}$$



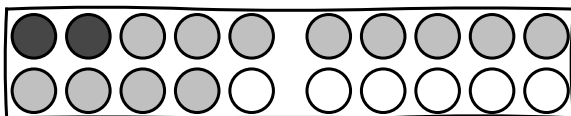
$$\text{---} + \text{---} = \text{---}$$



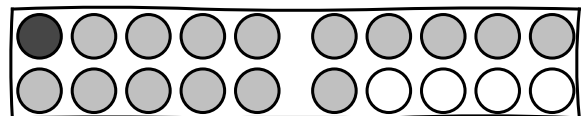
$$\text{---} + \text{---} = \text{---}$$



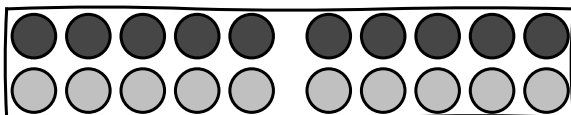
$$\text{---} + \text{---} = \text{---}$$



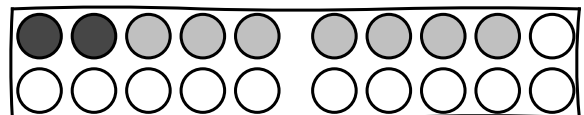
$$\text{---} + \text{---} = \text{---}$$



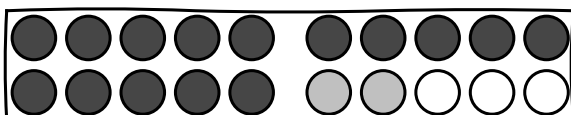
$$\text{---} + \text{---} = \text{---}$$



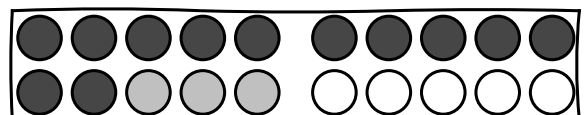
$$\text{---} + \text{---} = \text{---}$$



$$\text{---} + \text{---} = \text{---}$$



$$\text{---} + \text{---} = \text{---}$$



$$\text{---} + \text{---} = \text{---}$$